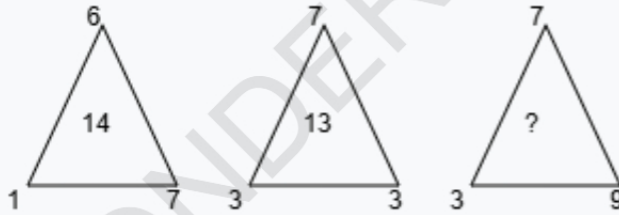


# WONDERKIDS

## Number Relations, Logical Reasoning

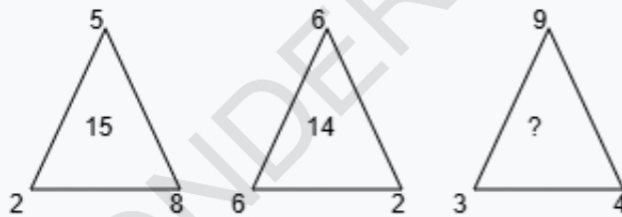
### Class I, Mathematics

**Q1. Find the missing number if the same rule is followed in all the three figures.**



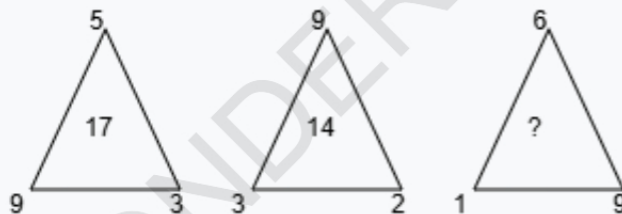
- A. 19    B. 20    C. 15    D. 16

**Q2. Find the missing number if the same rule is followed in all the three figures.**



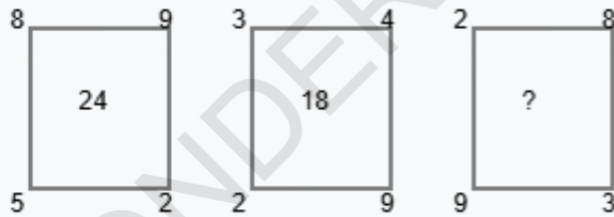
- A. 16    B. 20    C. 13    D. 11

**Q3. Find the missing number if the same rule is followed in all the three figures.**



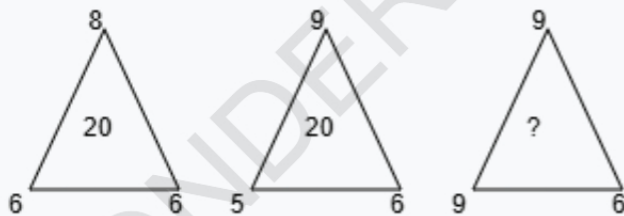
- A. 16    B. 17    C. 11    D. 15

**Q4. Find the missing number if the same rule is followed in all the three figures.**



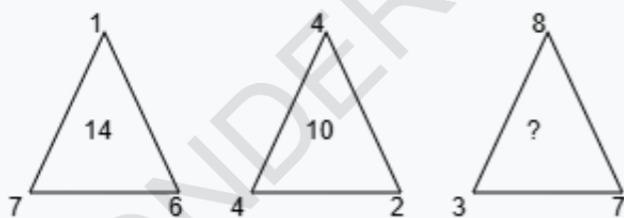
- A. 22    B. 24    C. 23    D. 26

**Q5. Find the missing number if the same rule is followed in all the three figures.**



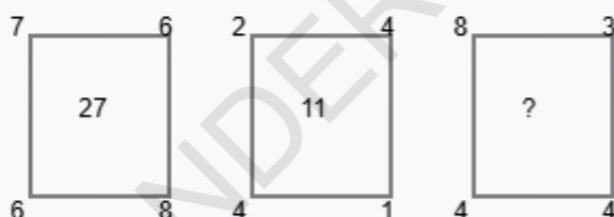
- A. 24    B. 19    C. 23    D. 20

**Q6. Find the missing number if the same rule is followed in all the three figures.**



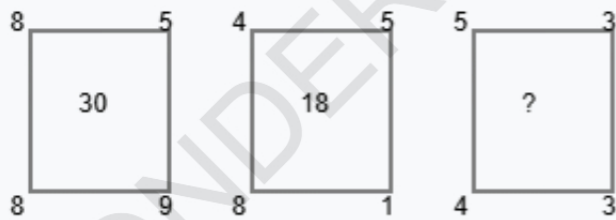
- A. 18    B. 19    C. 14    D. 23

**Q7. Find the missing number if the same rule is followed in all the three figures.**



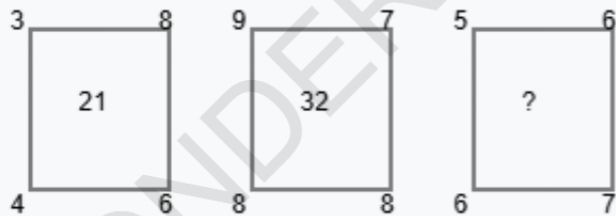
- A. 19    B. 20    C. 22    D. 21

**Q8. Find the missing number if the same rule is followed in all the three figures.**



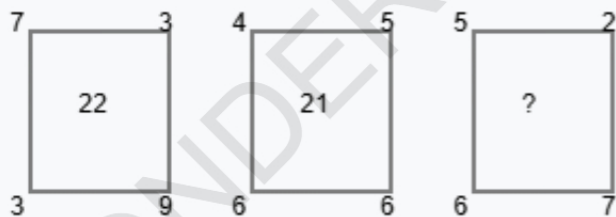
- A. 15    B. 20    C. 11    D. 13

**Q9. Find the missing number if the same rule is followed in all the three figures.**



- A. 24    B. 21    C. 26    D. 22

**Q10. Find the missing number if the same rule is followed in all the three figures.**



- A. 20    B. 15    C. 16    D. 18

# Answer Sheet

Q1. A	Q2. A	Q3. A
Q4. A	Q5. A	Q6. A
Q7. A	Q8. A	Q9. A
Q10. A		