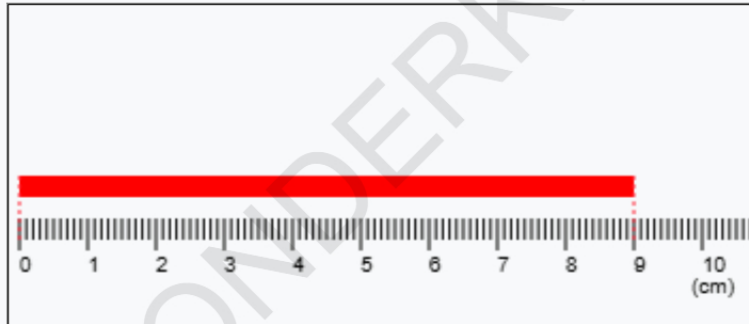
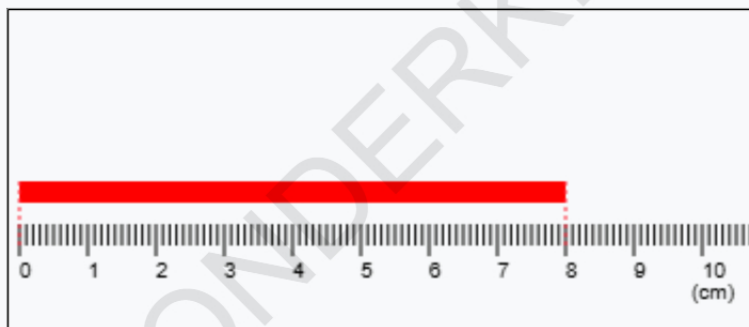


**Q1. What is the length of the rod given?**



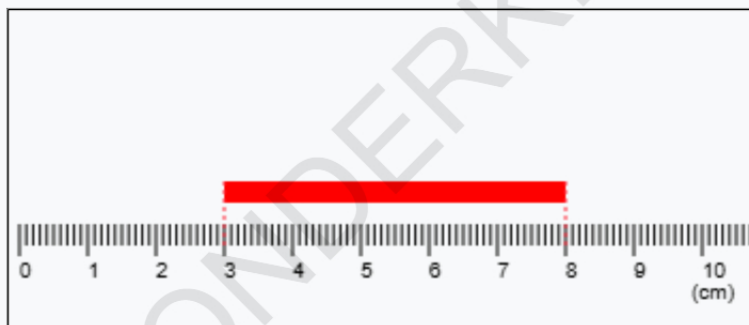
- A. 9cms    B. 18cms    C. 11cms    D. 6cms

**Q2. What is the length of the rod given?**



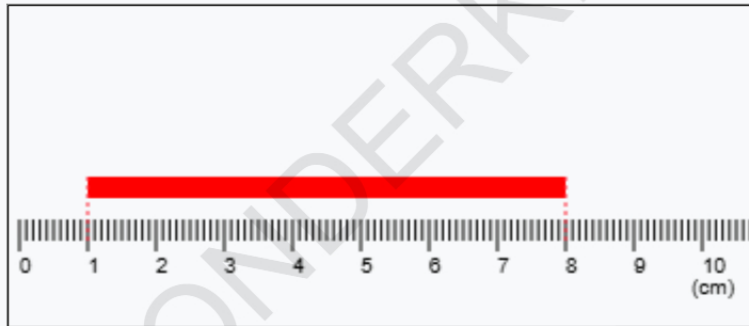
- A. 8cms    B. 2cms    C. 1cms    D. 12cms

**Q3. What is the length of the rod given?**



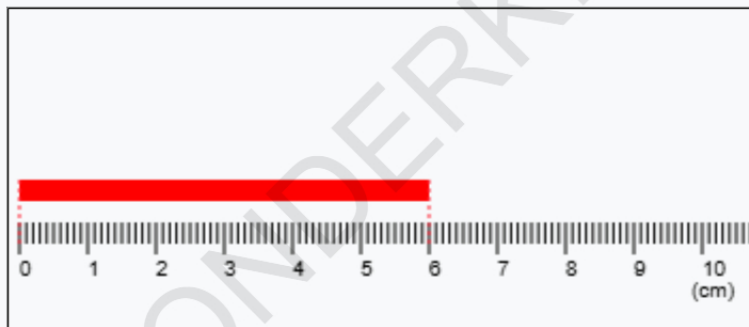
- A. 5cms    B. 3cms    C. 13cms    D. 2cms

**Q4. What is the length of the rod given?**



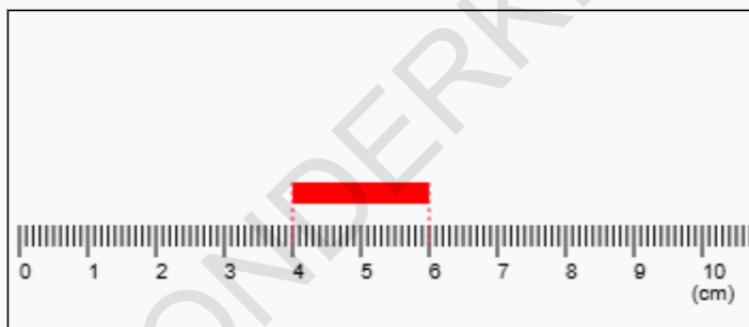
- A. 7cms    B. 15cms    C. 14cms    D. 0cms

**Q5. What is the length of the rod given?**



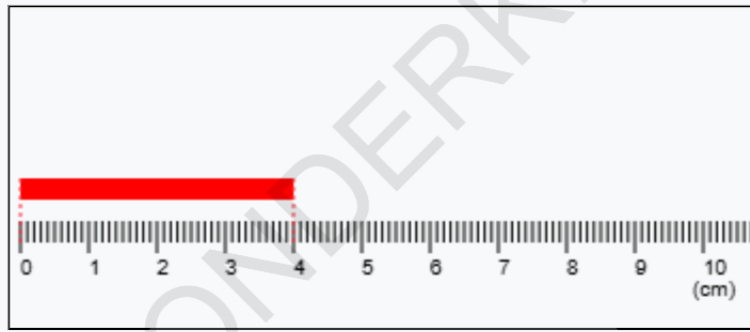
- A. 6cms    B. 9cms    C. 7cms    D. 2cms

**Q6. What is the length of the rod given?**



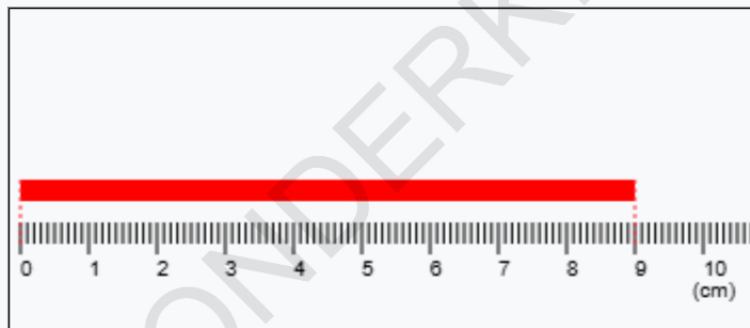
- A. 2cms    B. 1cms    C. 4cms    D. 6cms

**Q7. What is the length of the rod given?**



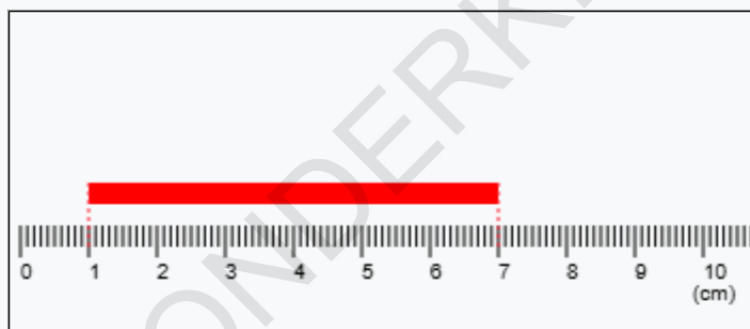
- A. 4cms    B. 3cms    C. 5cms    D. 2cms

**Q8. What is the length of the rod given?**



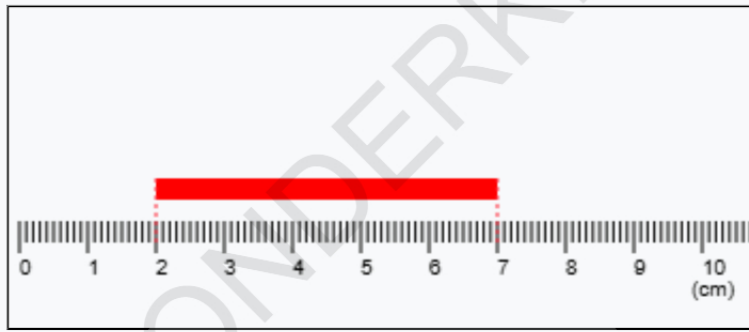
- A. 9cms    B. 8cms    C. 18cms    D. 0cms

**Q9. What is the length of the rod given?**



- A. 6cms    B. 3cms    C. 13cms    D. 1cms

Q10. What is the length of the rod given?



A. 5cms

B. 14cms

C. 1cms

D. 2cms

## Answer Sheet

Answer Sheet		
Q1. A	Q2. A	Q3. A
Q4. A	Q5. A	Q6. A
Q7. A	Q8. A	Q9. A
Q10. A		