


Q1. Timmy has a circular cookie. How many corners does his cookie have?

- A. 0
- B. 1
- C. 2
- D. 3

Q2. Which shape has 3 straight sides?



Q3. Identify the shape?



- A. Square
- B. Triangle
- C. Circle
- D. Cuboid

Q4. Emily has a square chocolate bar as shown below. If she eats one piece, how many corners will the resulting bar have?



- A. 2
- B. 4
- C. 6
- D. 8

Q5. My friend has a slice of pie and a whole pizza. Which one has more crust?




- A. Slice of pie
- B. Whole pizza
- C. They have the same amount of crust
- D. None of these


Q6. My friend has a red car and a blue truck. Which one has wheels?

- A. Red car
- B. Blue truck
- C. They both have wheels
- D. None of these

Q7. What do we use for writing?



Q8. Identify the shape?



- A. Cone
- B. Triangle
- C. Square
- D. Rectangle

Q9. How many sides does the given shape below have?



- A. 5
- B. 8
- C. 4
- D. 2

Q10. Find a shape that rolls like a wheel.

- A. Square
- B. Circle
- C. Triangle
- D. Rectangle

WONDERKIDS

Answer Sheet

Q1. A	Q2. C	Q3. D
Q4. C	Q5. B	Q6. C
Q7. B	Q8. A	Q9. A
Q10. B		

WONDERKIDS