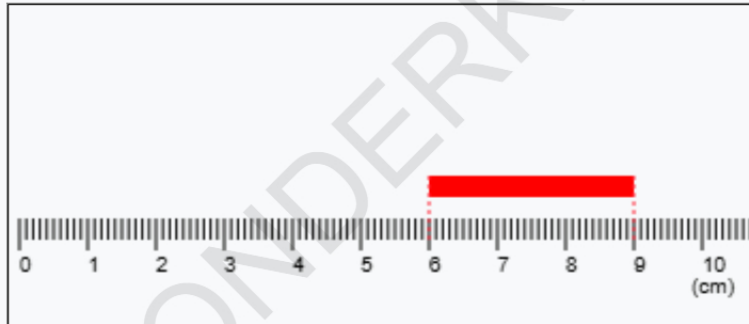
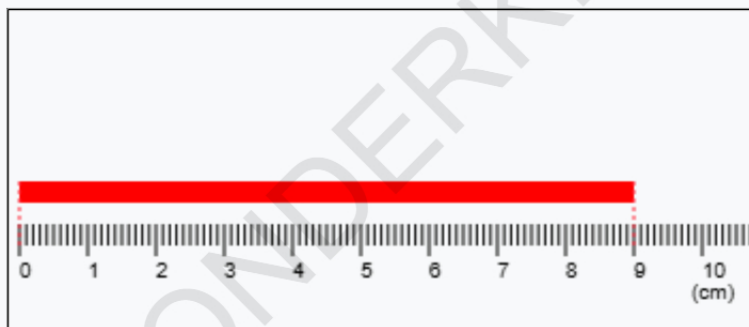


Q1. What is the length of the rod given?



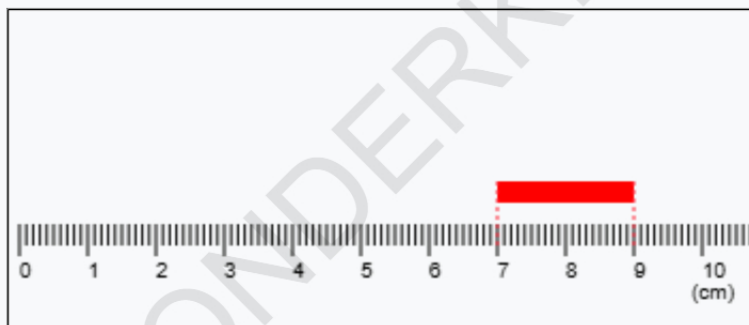
- A. 3cms B. 5cms C. 8cms D. 2cms

Q2. What is the length of the rod given?



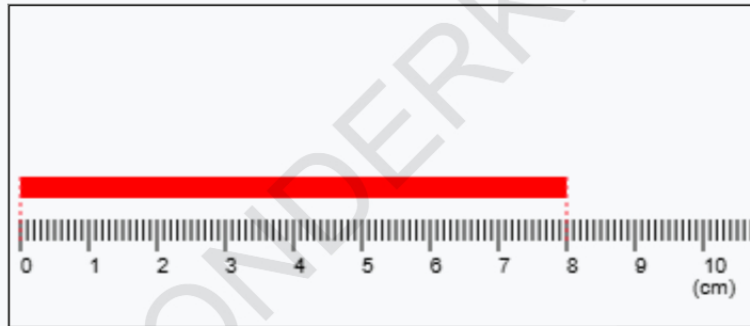
- A. 9cms B. 14cms C. 2cms D. 13cms

Q3. What is the length of the rod given?



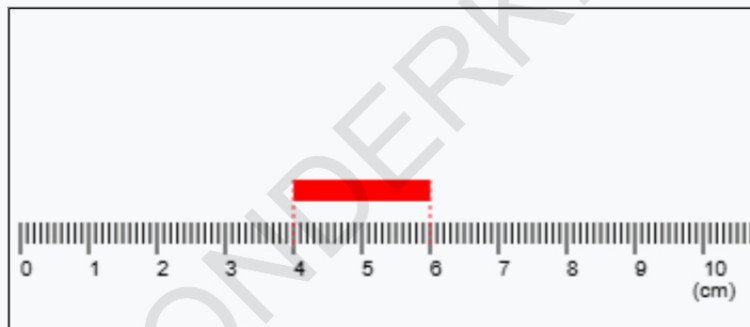
- A. 2cms B. 5cms C. 8cms D. 3cms

Q4. What is the length of the rod given?



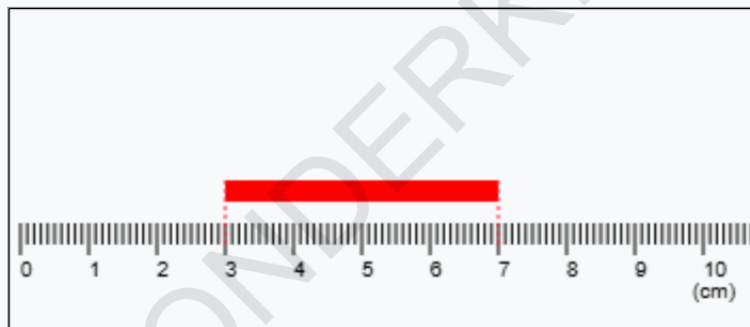
- A. 8cms B. 12cms C. 5cms D. 15cms

Q5. What is the length of the rod given?



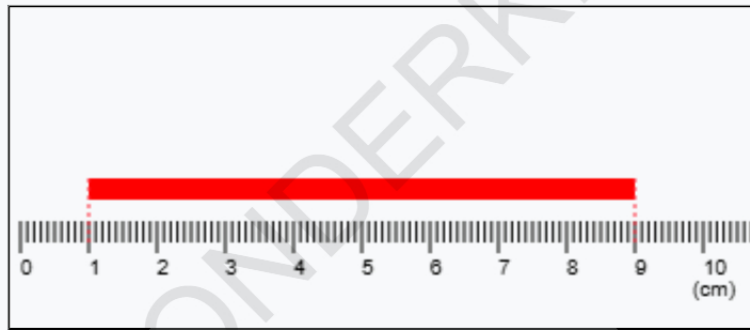
- A. 2cms B. 7cms C. 3cms D. 1cms

Q6. What is the length of the rod given?



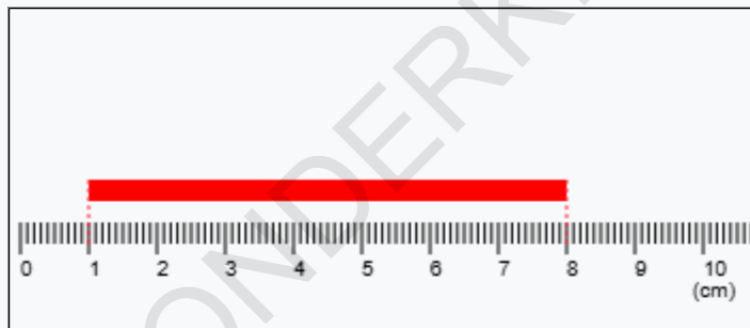
- A. 4cms B. 8cms C. 2cms D. 3cms

Q7. What is the length of the rod given?



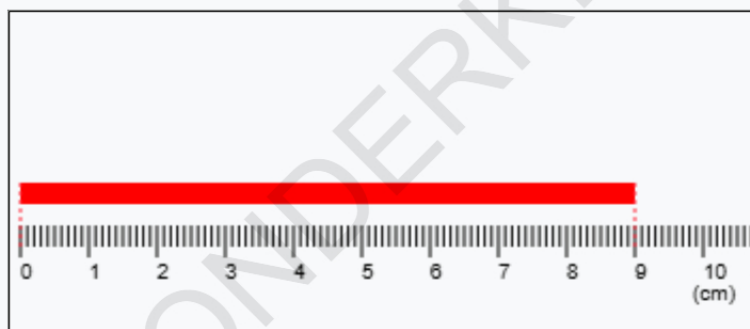
- A. 8cms B. 14cms C. 16cms D. 1cms

Q8. What is the length of the rod given?



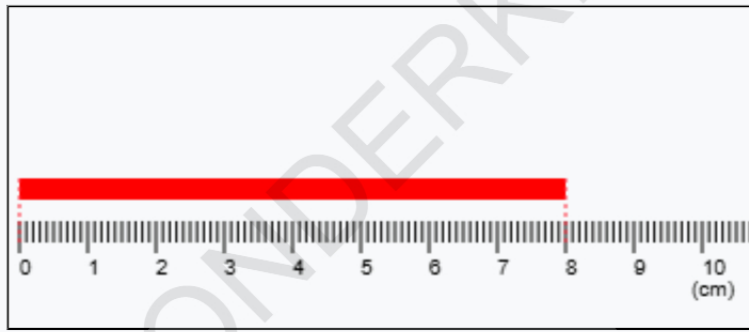
- A. 7cms B. 14cms C. 3cms D. 9cms

Q9. What is the length of the rod given?



- A. 9cms B. 4cms C. 17cms D. 10cms

Q10. What is the length of the rod given?



A. 8cms

B. 1cms

C. 5cms

D. 11cms

Answer Sheet

Answer Sheet		
Q1. A	Q2. A	Q3. A
Q4. A	Q5. A	Q6. A
Q7. A	Q8. A	Q9. A
Q10. A		