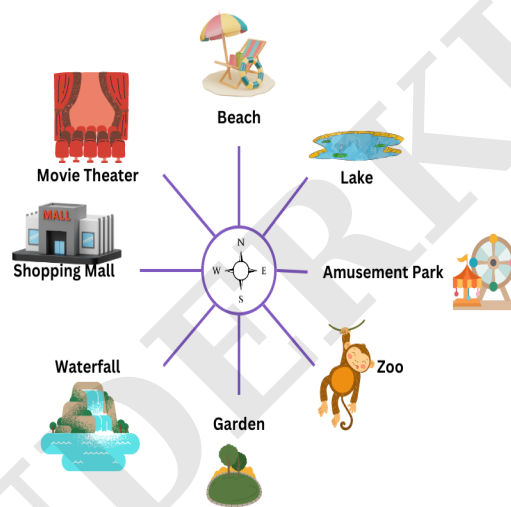
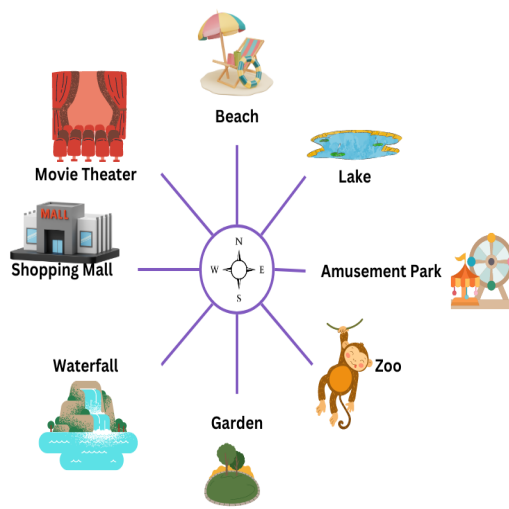


Q1. Qasim is facing towards Movie Theater. He then make a turn $\frac{7}{8}$ to their right direction. He then make a turn $\frac{1}{8}$ to their clockwise direction. He then make a turn $\frac{3}{4}$ to their left direction. Now if he wants to face towards the Shopping Mall, then what turn will he make from the given options?



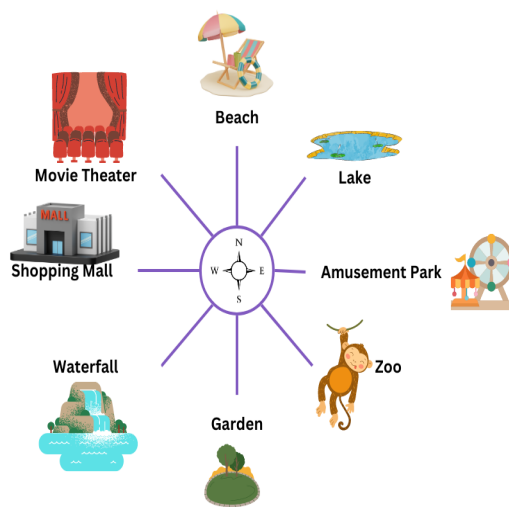
- A. $\frac{7}{8}$ left
- B. $\frac{1}{4}$ right
- C. $\frac{3}{8}$ left
- D. $\frac{1}{2}$ right

Q2. Manoj is facing towards Lake. He then make a turn $\frac{5}{8}$ to their clockwise direction. Now if he wants to face towards the Amusement Park, then what turn will he make from the given options?



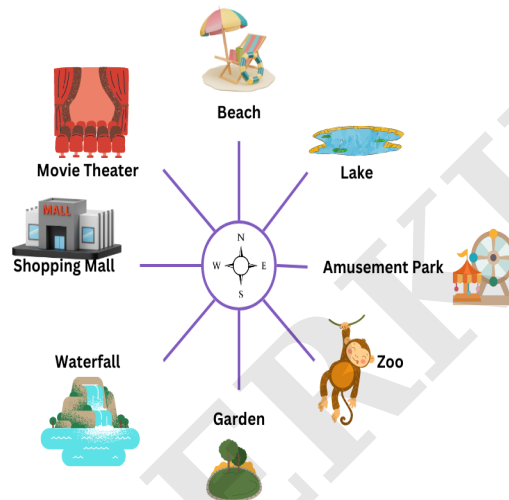
- A. $\frac{7}{8}$ left
- B. $\frac{1}{2}$ clockwise
- C. $\frac{1}{8}$ clockwise
- D. $\frac{3}{4}$ anticlockwise

Q3. Rohan is facing towards Amusement Park. He then make a turn $\frac{1}{4}$ to their left direction. He then make a turn $\frac{3}{8}$ to their clockwise direction. He then make a turn $\frac{7}{8}$ to their clockwise direction. Now if he wants to face towards the Beach, then what turn will he make from the given options?



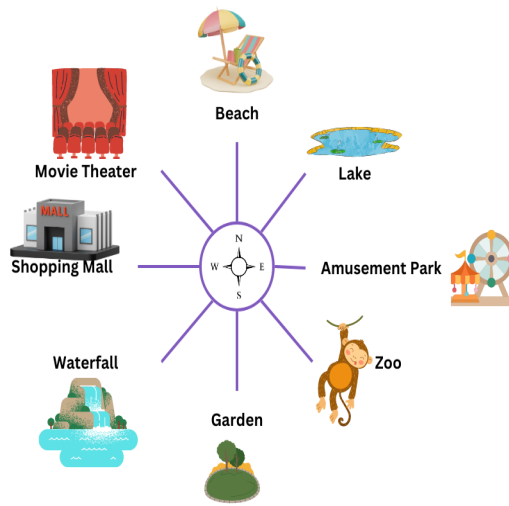
- A. $\frac{1}{8}$ clockwise
- B. $\frac{3}{4}$ anticlockwise
- C. $\frac{1}{8}$ anticlockwise

Q4. Jai is facing towards Lake. He then make a turn $\frac{3}{8}$ to their left direction. He then make a turn $\frac{3}{8}$ to their anticlockwise direction. He then make a turn $\frac{1}{2}$ to their anticlockwise direction. Now if he wants to face towards the Lake, then what turn will he make from the given options?



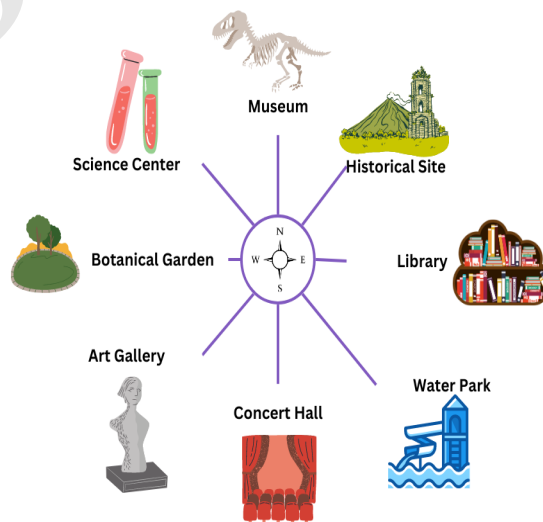
- A. $\frac{1}{4}$ left
- B. $\frac{1}{4}$ right
- C. $\frac{3}{4}$ left
- D. $\frac{3}{8}$ right

Q5. Pranav is facing towards Movie Theater. He then make a turn $\frac{1}{2}$ to their left direction. Now if he wants to face towards the Shopping Mall, then what turn will he make from the given options?



- A. $\frac{3}{8}$ right
- B. $\frac{7}{8}$ anticlockwise
- C. $\frac{1}{2}$ clockwise
- D. $\frac{3}{4}$ clockwise

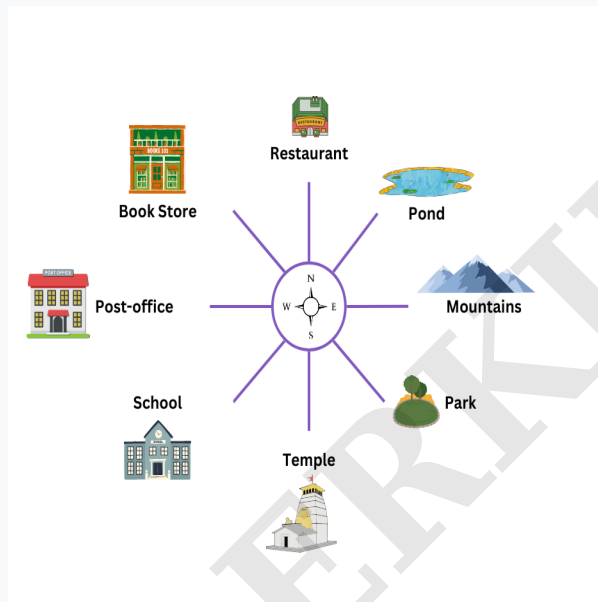
Q6. Nakul is facing towards Botanical Garden. He then make a turn $\frac{3}{4}$ to their right direction. He then make a turn $\frac{1}{2}$ to their right direction. He then make a turn $\frac{5}{8}$ to their right direction. Now if he wants to face towards the Library, then what turn will he make from the given options?



- A. $\frac{3}{4}$ anticlockwise
- B. $\frac{1}{4}$ anticlockwise
- C. $\frac{3}{8}$ left

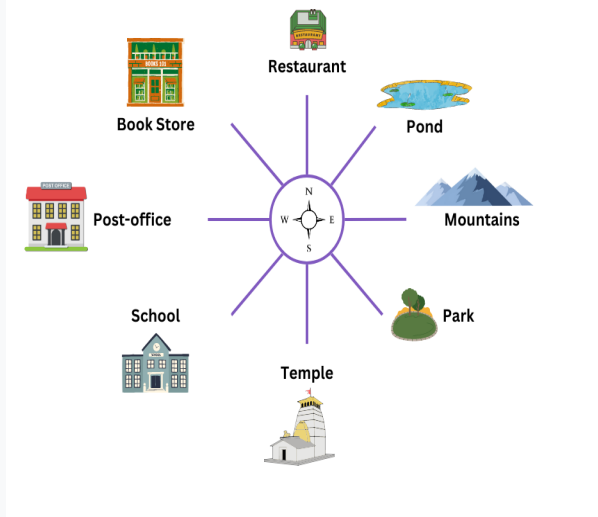
D. 1/2 clockwise

Q7. Jai is facing towards Book store. He then make a turn $\frac{3}{4}$ to their right direction. Now if he wants to face towards the Post-office, then what turn will he make from the given options?



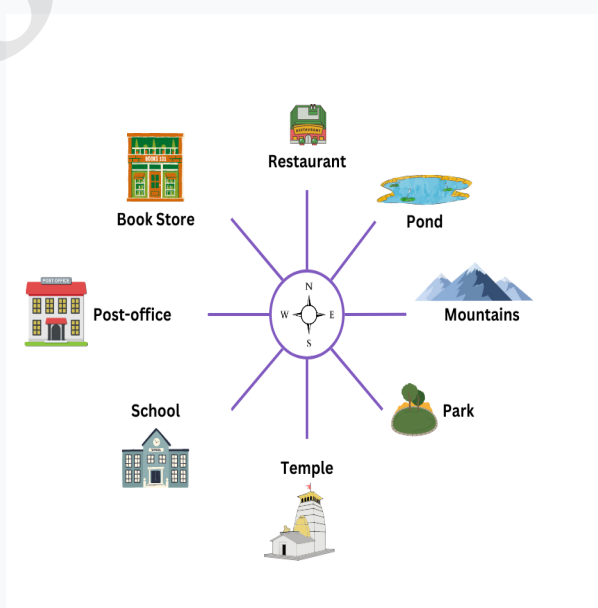
- A. $\frac{7}{8}$ left
- B. $\frac{3}{8}$ anticlockwise
- C. $\frac{7}{8}$ right
- D. $\frac{1}{8}$ right

Q8. Jai is facing towards Temple. He then make a turn $\frac{7}{8}$ to their right direction. Now if he wants to face towards the Pond, then what turn will he make from the given options?



- A. $\frac{3}{8}$ left
- B. $\frac{1}{4}$ left
- C. $\frac{7}{8}$ left
- D. $\frac{1}{8}$ anticlockwise

Q9. Harsh is facing towards Mountains. He then make a turn $\frac{7}{8}$ to their anticlockwise direction. He then make a turn $\frac{5}{8}$ to their anticlockwise direction. He then make a turn $\frac{3}{8}$ to their left direction. Now if he wants to face towards the Mountains, then what turn will he make from the given options?

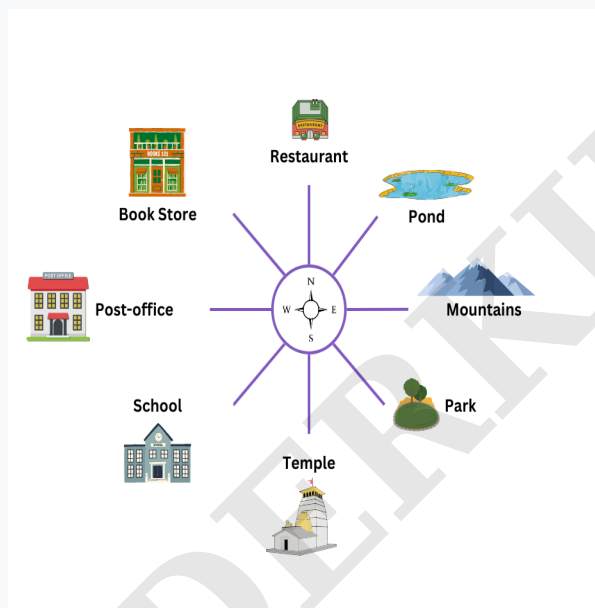


- A. $\frac{1}{8}$ anticlockwise
- B. $\frac{3}{4}$ left

C. $\frac{1}{2}$ clockwise

D. $\frac{7}{8}$ right

Q10. Aarav is facing towards Restaurant. He then make a turn $\frac{3}{8}$ to their left direction. He then make a turn $\frac{1}{4}$ to their left direction. Now if he wants to face towards the Park, then what turn will he make from the given options?



A. $\frac{3}{8}$ left

B. $\frac{3}{4}$ right

C. $\frac{7}{8}$ right

D. $\frac{0}{1}$ left

Answer Sheet

Q1. C	Q2. B	Q3. D
Q4. B	Q5. A	Q6. C
Q7. D	Q8. B	Q9. A
Q10. D		

WONDERKIDS