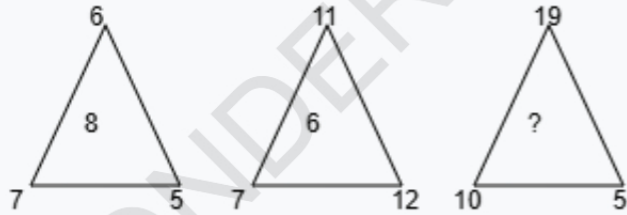


WONDERKIDS

Number Relations, Logical Reasoning

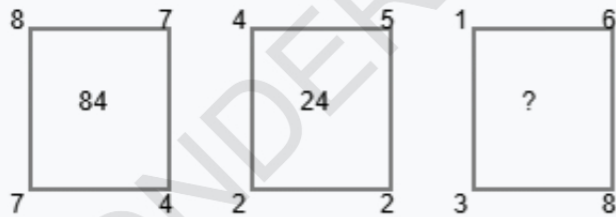
Class IV, Mathematics

Q1. Find the missing number if the same rule is followed in all the three figures.



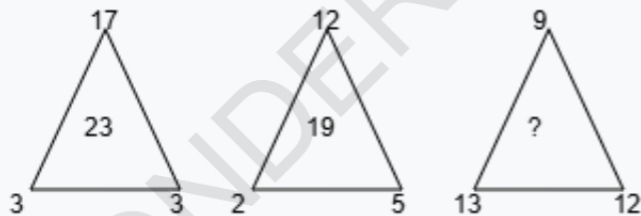
- A. 24 B. 28 C. 20 D. 22

Q2. Find the missing number if the same rule is followed in all the three figures.



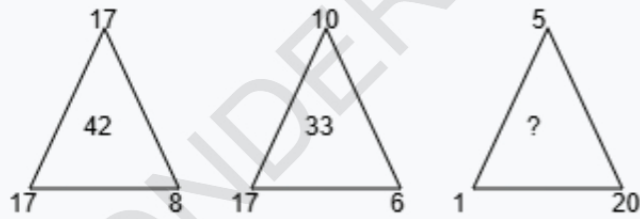
- A. 30 B. 32 C. 26 D. 28

Q3. Find the missing number if the same rule is followed in all the three figures.



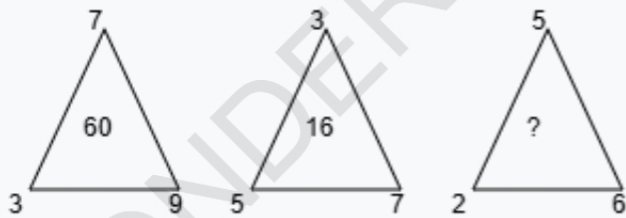
- A. 34 B. 33 C. 30 D. 32

Q4. Find the missing number if the same rule is followed in all the three figures.



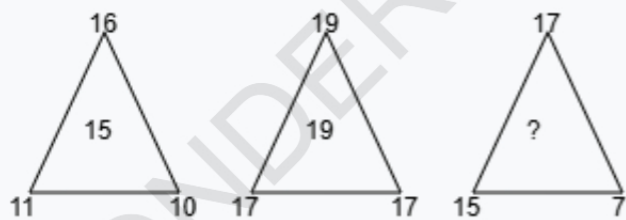
- A. 26 B. 22 C. 25 D. 27

Q5. Find the missing number if the same rule is followed in all the three figures.



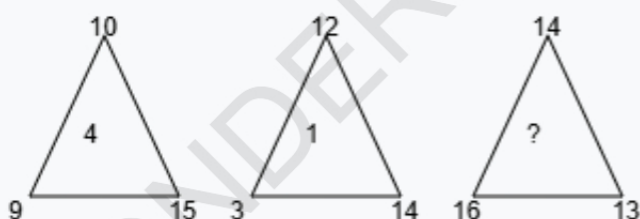
- A. 28 B. 30 C. 31 D. 29

Q6. Find the missing number if the same rule is followed in all the three figures.



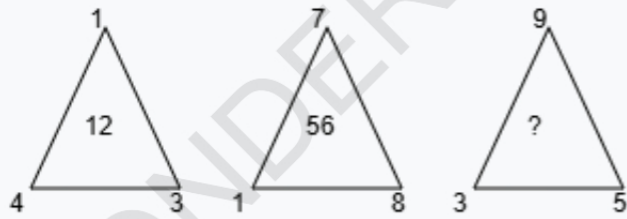
- A. 9 B. 4 C. 7 D. 12

Q7. Find the missing number if the same rule is followed in all the three figures.



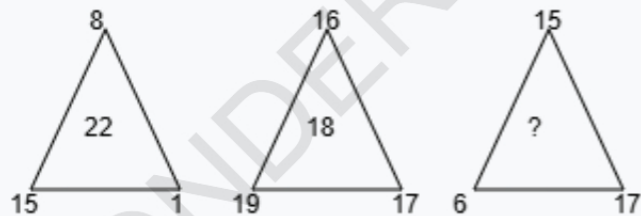
- A. 17 B. 14 C. 15 D. 22

Q8. Find the missing number if the same rule is followed in all the three figures.



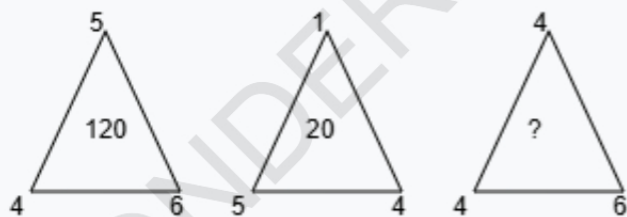
- A. 135 B. 132 C. 136 D. 134

Q9. Find the missing number if the same rule is followed in all the three figures.



- A. 4 B. 2 C. 8 D. 3

Q10. Find the missing number if the same rule is followed in all the three figures.



- A. 96 B. 100 C. 98 D. 97

Answer Sheet

| | | |
|--------|-------|-------|
| | | |
| Q1. A | Q2. A | Q3. A |
| Q4. A | Q5. A | Q6. A |
| Q7. A | Q8. A | Q9. A |
| Q10. A | | |