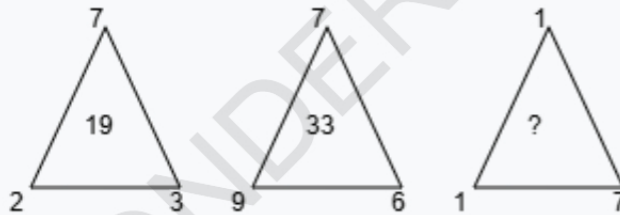


WONDERKIDS

Number Relations, Logical Reasoning

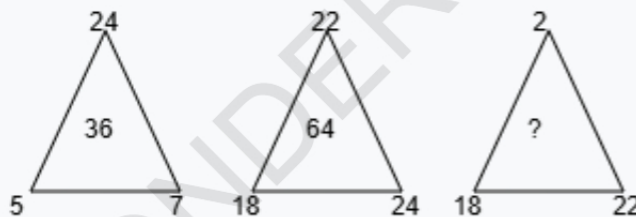
Class V, Mathematics

Q1. Find the missing number if the same rule is followed in all the three figures.



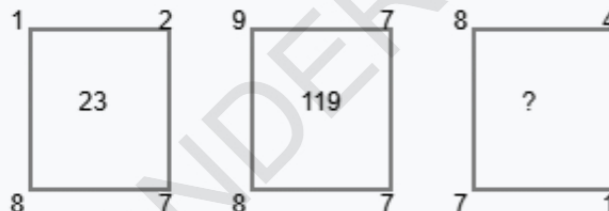
- A. 6 B. 11 C. 5 D. 7

Q2. Find the missing number if the same rule is followed in all the three figures.



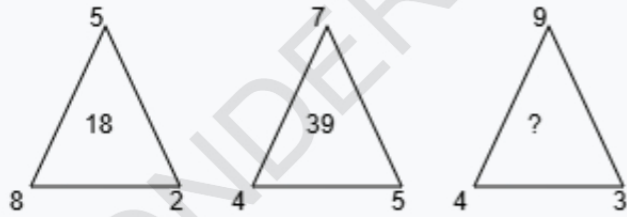
- A. 42 B. 41 C. 37 D. 47

Q3. Find the missing number if the same rule is followed in all the three figures.



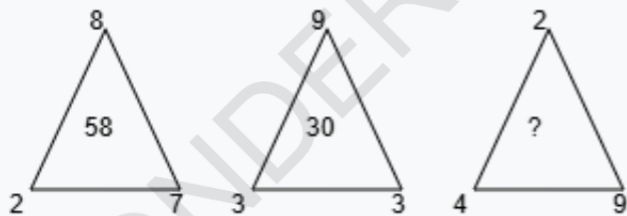
- A. 36 B. 32 C. 33 D. 37

Q4. Find the missing number if the same rule is followed in all the three figures.



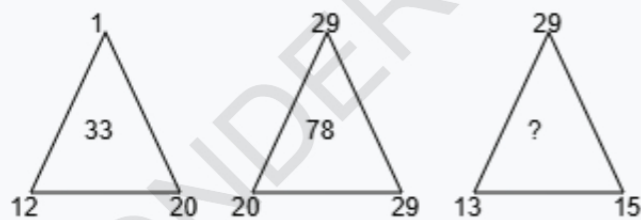
- A. 31 B. 26 C. 34 D. 30

Q5. Find the missing number if the same rule is followed in all the three figures.



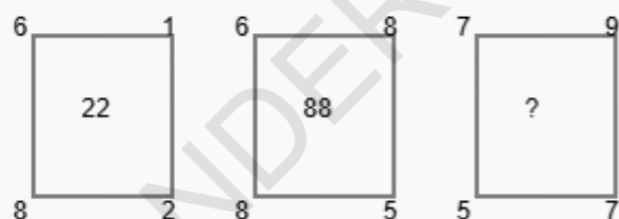
- A. 22 B. 21 C. 19 D. 26

Q6. Find the missing number if the same rule is followed in all the three figures.

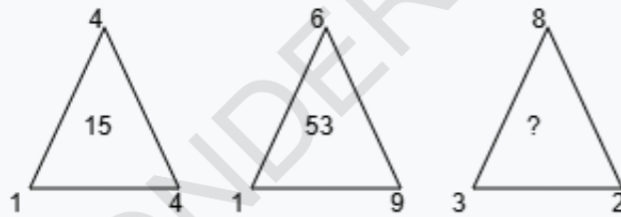


- A. 57 B. 59 C. 53 D. 52

Q7. Find the missing number if the same rule is followed in all the three figures.

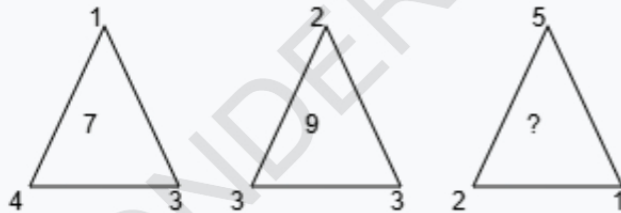


Q8. Find the missing number if the same rule is followed in all the three figures.



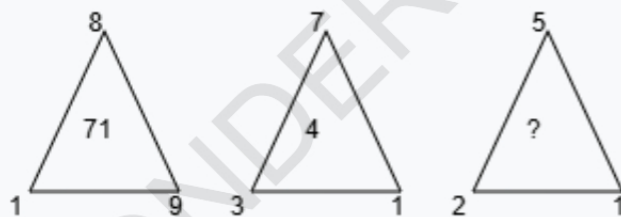
- A. 13 B. 9 C. 15 D. 12

Q9. Find the missing number if the same rule is followed in all the three figures.



- A. 7 B. 10 C. 8 D. 5

Q10. Find the missing number if the same rule is followed in all the three figures.



- A. 3 B. 1 C. 6 D. 0

Answer Sheet

Q1. A	Q2. A	Q3. A
Q4. A	Q5. A	Q6. A
Q7. A	Q8. A	Q9. A
Q10. A		