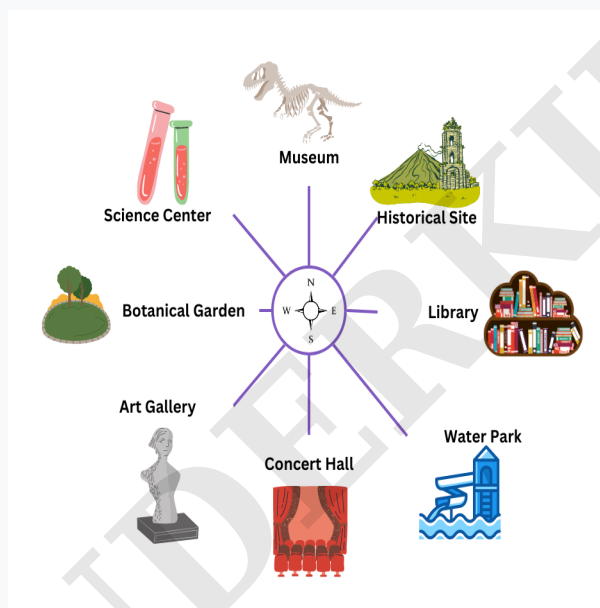
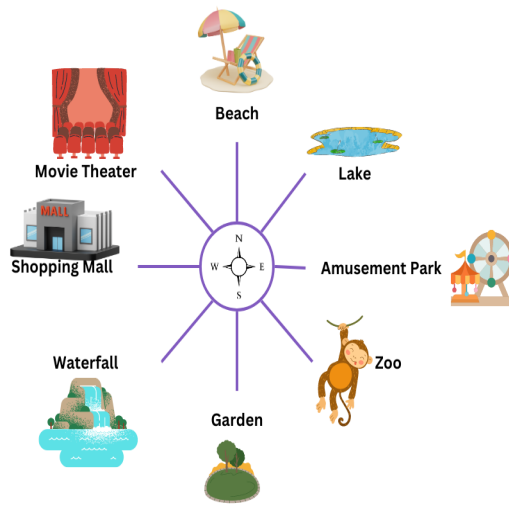


Q1. Rahul is facing towards Water Park. He then make a turn  $\frac{1}{2}$  to their clockwise direction. Now if he wants to face towards the Science Center, then what turn will he make from the given options?



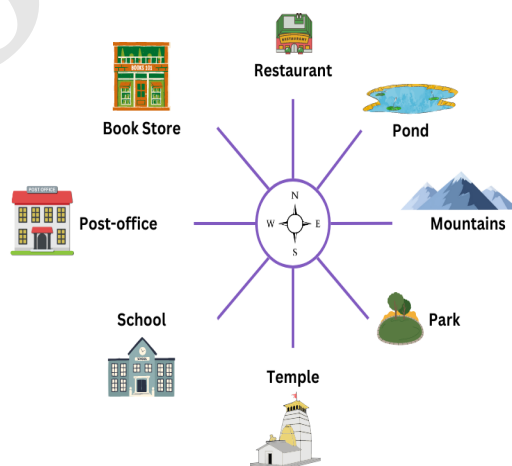
- A.  $\frac{1}{8}$  clockwise
- B.  $\frac{0}{1}$  anticlockwise
- C.  $\frac{3}{4}$  right
- D.  $\frac{3}{4}$  anticlockwise

Q2. Rohan is facing towards Movie Theater. He then make a turn  $\frac{1}{8}$  to their left direction. He then make a turn  $\frac{3}{4}$  to their clockwise direction. Now if he wants to face towards the Waterfall, then what turn will he make from the given options?



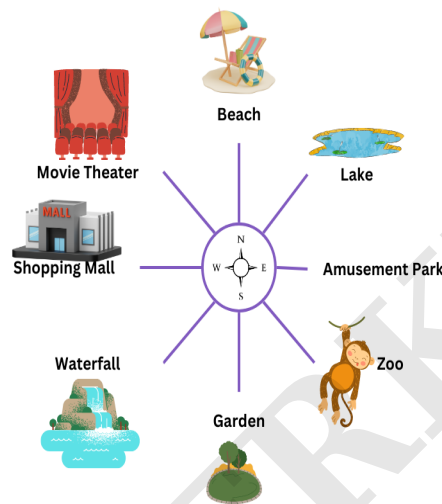
- A. 3/4 clockwise
- B. 1/4 clockwise
- C. 1/8 clockwise
- D. 1/2 left

Q3. Kabir is facing towards Park. He then make a turn 1/4 to their clockwise direction. He then make a turn 1/2 to their anticlockwise direction. Now if he wants to face towards the School, then what turn will he make from the given options?



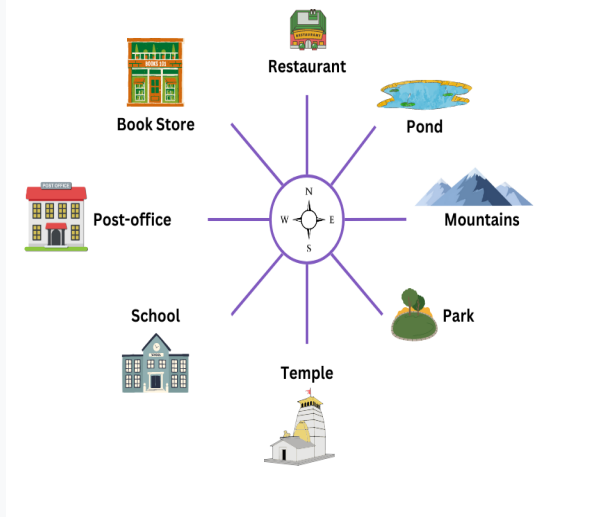
- A. 1/4 left
- B. 1/2 left
- C. 3/4 clockwise
- D. 1/2 right

Q4. Akash is facing towards Amusement Park. He then make a turn  $\frac{3}{4}$  to their right direction. He then make a turn  $\frac{7}{8}$  to their clockwise direction. He then make a turn  $\frac{1}{2}$  to their clockwise direction. Now if he wants to face towards the Beach, then what turn will he make from the given options?



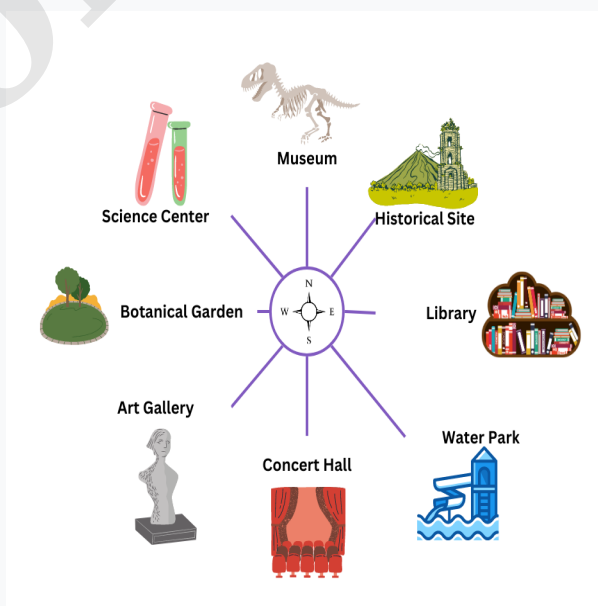
- A.  $\frac{5}{8}$  anticlockwise
- B.  $\frac{1}{8}$  left
- C.  $\frac{1}{4}$  right
- D.  $\frac{3}{8}$  anticlockwise

Q5. Utkarsh is facing towards Temple. He then make a turn  $\frac{1}{2}$  to their anticlockwise direction. He then make a turn  $\frac{3}{4}$  to their anticlockwise direction. Now if he wants to face towards the Mountains, then what turn will he make from the given options?



- A.  $\frac{5}{8}$  right
- B.  $\frac{0}{1}$  anticlockwise
- C.  $\frac{3}{4}$  right
- D.  $\frac{1}{4}$  anticlockwise

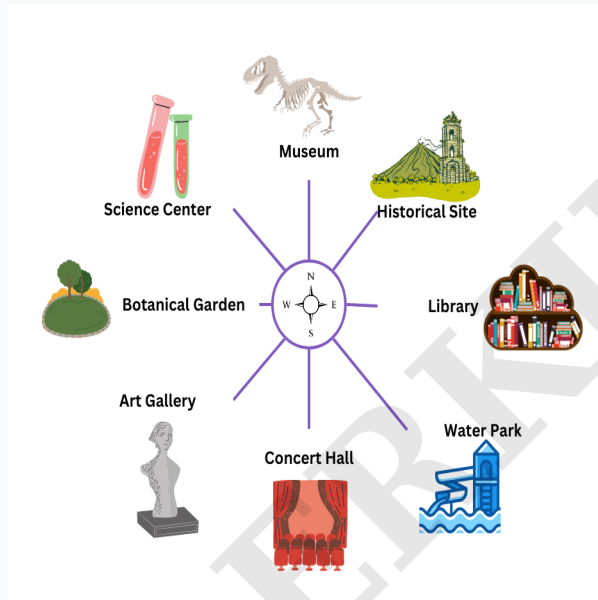
Q6. Nakul is facing towards Science Center. He then make a turn  $\frac{5}{8}$  to their right direction. He then make a turn  $\frac{1}{2}$  to their anticlockwise direction. Now if he wants to face towards the Water Park, then what turn will he make from the given options?



- A.  $\frac{3}{4}$  left
- B.  $\frac{1}{8}$  left
- C.  $\frac{5}{8}$  anticlockwise

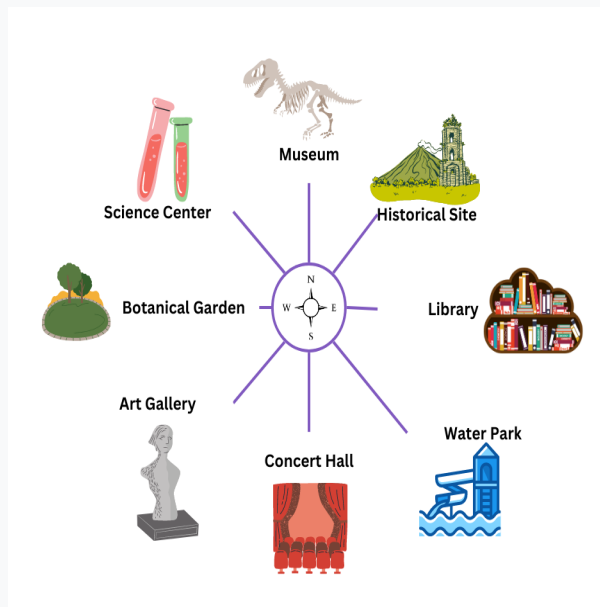
D.  $\frac{3}{8}$  right

Q7. Tarun is facing towards Library. He then make a turn  $\frac{1}{2}$  to their clockwise direction. He then make a turn  $\frac{1}{8}$  to their right direction. Now if he wants to face towards the Botanical Garden, then what turn will he make from the given options?



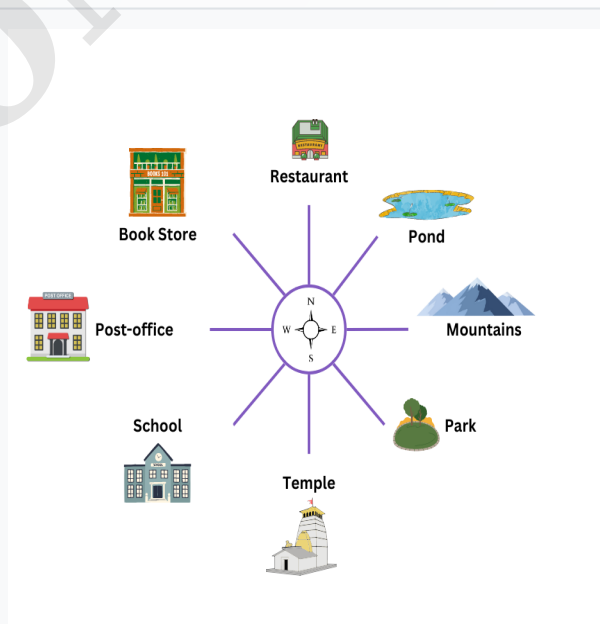
- A.  $\frac{5}{8}$  right
- B.  $\frac{7}{8}$  clockwise
- C.  $\frac{1}{8}$  left
- D.  $\frac{3}{4}$  right

Q8. Qamar is facing towards Water Park. He then make a turn  $\frac{3}{8}$  to their right direction. He then make a turn  $\frac{1}{2}$  to their right direction. He then make a turn  $\frac{1}{2}$  to their right direction. Now if he wants to face towards the Science Center, then what turn will he make from the given options?



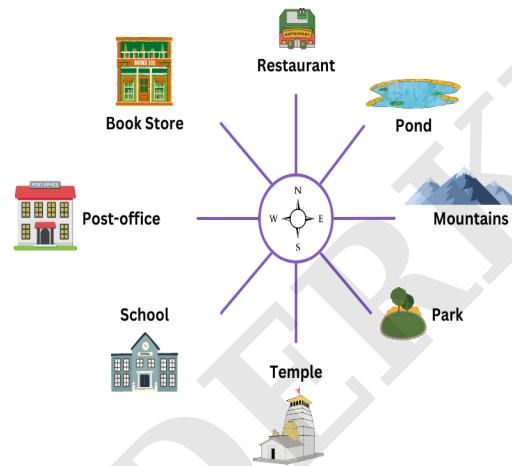
- A.  $\frac{1}{8}$  right
- B.  $\frac{1}{2}$  left
- C.  $\frac{5}{8}$  anticlockwise
- D.  $\frac{1}{4}$  right

Q9. Ganesh is facing towards Book store. He then make a turn  $\frac{3}{4}$  to their right direction. He then make a turn  $\frac{1}{4}$  to their anticlockwise direction. He then make a turn  $\frac{7}{8}$  to their anticlockwise direction. Now if he wants to face towards the Temple, then what turn will he make from the given options?



- A.  $\frac{3}{8}$  anticlockwise
- B.  $\frac{0}{1}$  left
- C.  $\frac{1}{8}$  anticlockwise

Q10. Manoj is facing towards Restaurant. He then make a turn  $\frac{1}{8}$  to their anticlockwise direction. He then make a turn  $\frac{7}{8}$  to their anticlockwise direction. He then make a turn  $\frac{1}{8}$  to their right direction. Now if he wants to face towards the Restaurant, then what turn will he make from the given options?



- A.  $\frac{3}{4}$  clockwise
- B.  $\frac{1}{8}$  anticlockwise
- C.  $\frac{1}{2}$  anticlockwise
- D.  $\frac{1}{2}$  right

# Answer Sheet

Q1. B	Q2. C	Q3. D
Q4. D	Q5. B	Q6. D
Q7. C	Q8. A	Q9. B
Q10. B		

WONDERKIDS